

Addition

word problems



Name: _____

Sending My Love!

Read and solve the word problem to find out how many bears in all.

My friend got _____

the same. How many bears did I get in all?

My Picture: _____

My Number Line: _____

My Answer: _____

My Ten Frame:

My Number Line:

0 1 2 3 4 5 6 7 8 9 10

Math Statement: _____ and _____ makes _____

My Answer: _____ bears

Teddy Bear Squeezes!

Read and solve the word problem to find out how many bears in all.

My mom gave me 3 small bears and dad gave me 5 big bears. How many bears did I get in all?

My Picture: _____

My Ten Frame:

My Number Line:

0 1 2 3 4 5 6 7 8 9 10


Math Statement: _____ and _____ makes _____

My Answer: _____ bears

Name: _____

Sending My Love!

Read and solve the word problem to find out how many cards in all.



My friend got 5 cards and I got the same. How many cards are there in all?

My Picture:

My Ten Frame:

My Number Path:

1	2	3	4	5	6	7	8	9	10
---	---	---	---	---	---	---	---	---	----

My Math Statement:

_____ and _____ makes _____


My Answer:

_____ cards

Name: _____

Teddy Bear Squeezes!

Read and solve the word problem to find out how many bears in all.



My mom gave me 3 small bears and dad gave me 5 big bears. How many bears did I get in all?

My Picture:

My Ten Frame:

My Number Path:

1	2	3	4	5	6	7	8	9	10
---	---	---	---	---	---	---	---	---	----

My Math Statement:


_____ and _____ makes _____

My Answer:

_____ bears

Name: _____

A Sweet Tooth!



Read and solve the word problem to find out how many cupcakes in all.

I ate 5 chocolate cupcakes and 4 vanilla cupcakes.

How many cupcakes did I eat in all?

My Picture:

My Ten Frame:

My Number Path:

1	2	3	4	5	6	7	8	9	10
---	---	---	---	---	---	---	---	---	----

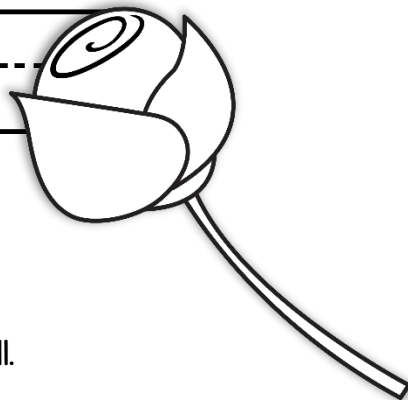
My Math Statement:

_____ and _____ makes _____

My Answer:

_____ cupcakes

Name: _____



Roses are Red!

Read and solve the word problem to find out how many roses in all.

I picked 8 red roses and 2 pink roses for my mom. How many roses did I pick in all?

My Picture:

My Ten Frame:

My Number Path:

1	2	3	4	5	6	7	8	9	10
---	---	---	---	---	---	---	---	---	----


My Math Statement:

_____ and _____ makes _____

My Answer:

_____ roses

Name: _____



Gifts Galore!

Read and solve the word problem to find out how many gifts in all.

I got 6 presents for my mom and 3 presents for my dad. How many presents did I get in all?

My Picture:

My Ten Frame:

My Number Path:

1	2	3	4	5	6	7	8	9	10
---	---	---	---	---	---	---	---	---	----

My Math Statement:

_____ and _____ makes _____

My Answer:

_____ gifts